



|| Jai Sri Gurudev ||



BGSKH Education Trust(R.) - A unit of Sri Adichunchanagiri Shikshana Trust(R.)
BGS College Of Engineering and Technology



VTU - June / July. 2024 - IV Sem Question Papers

2022 - Scheme





||Jai Sri Gurudev ||
BGSKH Education Trust (R.) – A unit of Sri Adichunchanagiri Shikshana Trust(R.)
BGS College of Engineering and Technology
Mahalakshimpuram, West of Chord Road, Bengaluru-560086
(Approved by AICTE, New Delhi and Affiliated to VTU, Belagavi)

IV Semester Question Papers June/July - 2024

Sl.No	Name of the Subject	Subject Code
1	Analysis and Design of Algorithms	BCS401
2	Advanced Java	BIS402
3	Microcontrollers	BCS402
4	Computer Graphics and Visualization	BCG402
5	Artificial Intelligence	BAD402
6	Database Management Systems	BCS403
7	Discrete Mathematical Structures	BCS405A
8	Graph Theory	BCS405B
9	Biology for Engineers (CSE)	BBOC407
10	Universal Human Values Course	BUHK408



CBCS SCHEME

USN

--	--	--	--	--	--	--	--	--	--	--

BCS401

Fourth Semester B.E./B.Tech. Degree Examination, June/July 2024 Analysis and Design of Algorithms

Time: 3 hrs.

Max. Marks: 100

*Note: 1. Answer any FIVE full questions, choosing ONE full question from each module.
2. M : Marks, L: Bloom's level, C: Course outcomes.*

Module - 1			M	L	C
Q.1	a.	What is an algorithm? Explain the fundamentals of algorithmic problem solving.	10	L2	CO1
	b.	Develop an algorithm to search an element in an array using sequential search. Calculate the best case, worst case and average case efficiency of this algorithm.	10	L3	CO1
OR					
Q.2	a.	Explain asymptotic notations with example.	10	L2	CO1
	b.	Give the general plan for analyzing the efficiency of the recursive algorithm. Develop recursive algorithm for computing factorial of a positive number. Calculate the efficiency in terms of order of growth.	10	L3	CO1
Module - 2					
Q.3	a.	Explain Strassen's matrix multiplication approach with example and derive its time complexity.	10	L3	CO2
	b.	What is divide and conquer? Develop the quick sort algorithm and write its best case. Make use of this algorithm to sort the list of characters: E, X, A, M, P, L, E.	10	L2	CO2
OR					
Q.4	a.	Distinguish between decrease & conquer and divide & conquer algorithm design techniques with block diagram. Develop insertion sort algorithm to sort a list of integers and estimate the efficiency.	10	L3	CO2
	b.	Define topological sorting. List the two approaches of topological sorting and illustrate with examples.	10	L2	CO2
Module - 3					
Q.5	a.	Define AVL tree with an example. Give worst case efficiency of operations on AVL tree. Construct an AVL tree of the list of keys: 5, 6, 8, 3, 2, 4, 7 indicating each step of key insertion and rotation.	10	L3	CO3
	b.	Define Heap. Explain the bottom-up heap construction algorithm. Apply heap sort to sort the list of numbers 2, 9, 7, 6, 5, 8 in ascending order using array representation.	10	L3	CO3
OR					
Q.6	a.	Define 2-3 tree. Give the worst case efficiency of operations on 2-3 tree. Build 2-3 tree for the list of keys 9, 5, 8, 3, 2, 4, 7 by indicating each step of key insertion and node splits.	10	L3	CO3
	b.	Design Horspool algorithm for string matching. Apply this algorithm to find the pattern BARBER in the text: JIM SAW ME IN A BARBERSHOP	10	L3	CO3
Module - 4					
Q.7	a.	Apply Dijkstra's algorithm to find the single source shortest path for given graph [Fig. Q7(a)] by considering 's' as source vertex. Illustrate each step.	10	L3	CO4



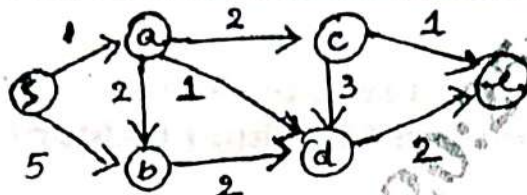


Fig. Q7(a)

- b. Define transitive closure. Write Warshall's algorithm to compute transitive closure. Illustrate using the following directed graph.

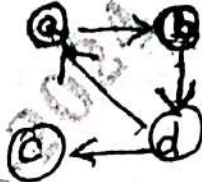


Fig. Q7(b)

OR

- Q.8 a. Define minimum spanning tree. Write Kruskal's algorithm to find minimum spanning tree. Illustrate with the following undirected graph.

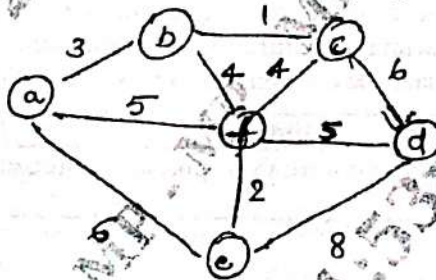


Fig. Q8(a)

- b. Construct Huffman Tree and resulting code for the following:

Character	A	B	C	D	E
Probability	0.4	0.1	0.2	0.15	0.15

- (i) Encode the text : ABACABAD
(ii) Decode the text : 100010111001010

Module - 5

- Q.9 a. Explain n-Queen's problem with example using backtracking approach.

- b. Solve the following instance of the knapsack problem by the branch-and-bound algorithm. Construct state-space tree.

Item	Weight	Value
1	4	\$ 40
2	7	\$ 42
3	5	\$ 25
4	3	\$ 12

The knapsack's capacity W is 10.

OR

- Q.10 a. Differentiate between Branch and Bound technique and Backtracking. Apply backtracking to solve the following instance of subset-sum problem $S = \{3, 5, 6, 7\}$ and $d = 15$. Construct a state space tree.

- b. Explain greedy approximation algorithm to solve discrete knapsack problem.

.....

CBCGS SCHEME

USN

--	--	--	--	--	--	--	--	--	--

BIS402

Fourth Semester B.E./B.Tech. Degree Examination, June/July 2024 Advanced Java

Time: 3 hrs.

Max. Marks: 100

*Note: 1. Answer any FIVE full questions, choosing ONE full question from each module.
2. M : Marks , L: Bloom's level , C: Course outcomes.*

Module - 1			M	L	C
Q.1	a.	What is collection Framework? Explain the methods defined by the following Interfaces: (i) Collection (ii) List (iii) Sorted Set (iv) Queue	10	L2	CO1
	b.	What are Legacy Classes? Explain any four legacy classes of Java's collection Framework with suitable program.	10	L2	CO1
OR					
Q.2	a.	Explain how collectors can be accessed using an iterator with example.	5	L3	CO1
	b.	What are the various changes that collection framework underwent recently?	5	L1	CO1
	c.	With an example program, explain how to store user-defined classes in collections.	10	L2	CO1
Module - 2					
Q.3	a.	Explain any two character extraction methods of string class.	5	L2	CO2
	b.	Explain the various string constructors used in Java with examples.	10	L2	CO2
	c.	Explain additional string methods.	5	L2	CO2
OR					
Q.4	a.	Briefly describe special string operations with syntax and examples.	5	L2	CO2
	b.	Explain the following methods of string buffer class with examples : (i) capacity () (ii) reverse () (iii) insert (iv) append ()	10	L2	CO2
	c.	Explain any four string modification methods of string class.	5	L2	CO2
Module - 3					
Q.5	a.	Explain the four types of the swing buttons, with demonstration program.	10	L3	CO3
	b.	Explain MVC connector Architecture.	5	L2	CO3
	c.	What are the two key swing features? Discuss.	5	L1	CO3
OR					
Q.6	a.	Explain the following : (i) JLabel and Image Icon. (ii) JTextField	10	L2	CO3
	b.	Write a program to demonstrate a simple swing application.	10	L3	CO3
Module - 4					
Q.7	a.	Explain the life cycle of Servlets.	5	L2	CO4
	b.	Describe the core interfaces that are provided in Jakarta (Javax), Servlet, http package.	5	L2	CO4
	c.	Define JSP. Explain the different types of JSP tags by taking suitable example.	10	L2	CO4
OR					



Q.8	a.	Explain any two cookies method.	5	L1	CO4
	b.	With a code, explain how to handle HTTP get requests and HTTP post requests.	10	L2	CO4
	c.	Explain how cookies can be handled using servlets.	5	L4	CO4
Module – 5					
Q.9	a.	Explain different steps involved in JDBC process with a code snippet.	10	L3	CO5
	b.	List and elaborate Database Metadata Object methods.	5	L2	CO5
	c.	List and explain three kinds of exception occurred in JDBC.	5	L2	CO5
OR					
Q.10	a.	Mention all steps to create the association between the database and a JDBC/ODBC bridge.	12	L3	CO5
	b.	Explain the four types of JDBC drivers.	8	L2	CO5

CBCS SCHEME

USN

BAD402

Fourth Semester B.E./B.Tech. Degree Examination, June/July 2024 Artificial Intelligence

Time: 3 hrs.

Max. Marks: 100

*Note: 1. Answer any FIVE full questions, choosing ONE full question from each module.
2. M : Marks , L: Bloom's level , C: Course outcomes.*

Module - 1			M	L	C													
Q.1	a.	Define Artificial Intelligence. Explain the foundation of AI in detail.	10	L1	CO1													
	b.	Explain all four different approaches to AI in detail.	10	L1	CO1													
OR																		
Q.2	a.	Give PEAS specification for : i) Automated taxi driver ii) Medical diagnostic system.	10	L1	CO1													
	b.	Differentiation : i) Fully observable Vs partially observation ii) Single agent Vs Multiagent iii) Deterministic Vs stochastic iv) Static Vs Dynamic.	10	L1	CO1													
Module - 2																		
Q.3	a.	Explain five components and well defined problem. Consider an 8-puzzle problem as an example and explain.	10	L2	CO2													
	b.	Discuss in detail in Infrastructure for search algorithm.	10	L2	CO2													
OR																		
Q.4	a.	Write an algorithm for Breadth - first search and explain with an example.	10	L2	CO2													
	b.	Explain Depth first search techniques in detail.	10	L2	CO2													
Module - 3																		
Q.5	a.	Explain the A* search to minimize the total estimated cost.	10	L3	CO3													
	b.	Write an algorithm for hill climbing search and explain in detail.	10	L3	CO3													
OR																		
Q.6	a.	In the below graph, find the path from A to G. Using Greedy Best First search and A* search algorithm. The values in the table represent heuristic values of reaching the goal node G pass current node.	10	L3	CO3													
	<div style="margin-top: 10px;"> <table border="1" style="display: inline-table; border-collapse: collapse;"> <tr><td>A</td><td>5</td></tr> <tr><td>B</td><td>6</td></tr> <tr><td>C</td><td>4</td></tr> <tr><td>D</td><td>3</td></tr> <tr><td>E</td><td>3</td></tr> <tr><td>F</td><td>1</td></tr> <tr><td>G</td><td>0</td></tr> </table> </div>		A	5	B	6	C	4	D	3	E	3	F	1	G	0		
A	5																	
B	6																	
C	4																	
D	3																	
E	3																	
F	1																	
G	0																	

Fig Q6(a)



	b.	Explain the syntax and semantion of propositional logic.	10	L3	CO3
Module – 4					
Q.7	a.	Explain the syntax and semantics of the first order logic.	10	L2	CO2
	b.	Explain the following with respect to the first order logic i) Assertions and Queries in first order logic ii) The Kinship domain iii) Numbers, sets and lists.	10	L2	CO2
OR					
Q.8	a.	Explain unification and lifting in detail.	10	L3	CO4
	b.	Explain Forward chaining algorithm with an example.	10	L3	CO4
Module – 5					
Q.9	a.	Explain basic probability Notation in detail.	10	L3	CO5
	b.	Explain Baye's rule and its use in detail.	10	L3	CO5
OR					
Q.10	a.	Explain Independence in Quantifying uncertainty with example.	10	L3	CO5
	b.	Explain knowledge Acquiring in detail.	10	L3	CO5

CBCS SCHEME

BCG402

USN

--	--	--	--	--	--	--	--	--	--

Fourth Semester B.E./B.Tech.Degree Examination, June/July 2024 Computer Graphics and Visualization

Time: 3 hrs.

Max. Marks: 100

*Note: 1. Answer any FIVE full questions, choosing ONE full question from each module.
2. M : Marks, L: Bloom's level, C: Course outcomes.*

Module - 1			M	L	C
Q.1	a.	What is computer graphics? Explain applications of computer graphics with examples.	10	L2	CO1
	b.	Explain in detail graphics pipeline architecture.	10	L2	CO1
OR					
Q.2	a.	With necessary steps explain Bresenham's line drawing algorithm. Consider the line from (6, 6) to (12, 8). Use the algorithm to rasterize the line.	10	L3	CO1
	b.	Explain the various graphics functions with example.	10	L2	CO1
Module - 2					
Q.3	a.	Explain 2D geometric transformations in detail.	10	L2	CO2
	b.	Develop OpenGL program to create and rotate a triangle about the origin and fixed point.	10	L3	CO2
OR					
Q.4	a.	Explain homogeneous co-ordinate representation.	10	L2	CO2
	b.	Develop OpenGL program to create and rotate cube.	10	L3	CO2
Module - 3					
Q.5	a.	Explain in detail various logical devices.	10	L2	CO3
	b.	Explain traditional animation technique in detail with example.	10	L2	CO3
OR					
Q.6	a.	Explain input modes in detail with neat diagram.	10	L2	CO3
	b.	Explain character animation and periodic motions in detail.	10	L2	CO3
Module - 4					
Q.7	a.	Explain Cohen-Sutherland algorithm with example and neat diagram.	10	L3	CO4
	b.	Explain in detail, The Phong Lighting model.	10	L2	CO4
OR					
Q.8	a.	Explain color models.	10	L2	CO4
	b.	Write a short note on (i) Normalization and View port transformation. (ii) 2D point clipping.	06 04	L4	CO3
Module - 5					
Q.9	a.	Explain the concept of hidden surface removal.	10	L2	CO5
	b.	Explain perspective projection with neat diagram.	10	L2	CO5
OR					
Q.10	a.	Develop OpenGL program to draw a polygon and allow user to move the camera suitably to experiment with perspective viewing.	10	L3	CO5
	b.	Explain orthographic and axonometric projection. Bring out the differences.	10	L2	CO5

.....



MP - MP

CBCS SCHEME

BCS402

USN

--	--	--	--	--	--	--	--	--	--

Fourth Semester B.E./B.Tech. Degree Examination, June/July 2024 Microcontrollers

Max. Marks: 100

Time: 3 hrs.

*Note: 1. Answer any FIVE full questions, choosing ONE full question from each module.
2. M : Marks, L: Bloom's level, C: Course outcomes.*

Module - 1			M	L	C
Q.1	a.	Explain the architecture of an arm embedded device with a neat diagram.	10	L2	CO1
	b.	How are monitor and control internal operations performed in ARM core? Explain in brief.	10	L2	CO1
OR					
Q.2	a.	Explain memory management in ARM core. Compare cache and tightly coupled memory.	10	L2	CO1
	b.	Explain mechanism applied by ARM core to handle exception, interrupts using different vector table.	10	L2	CO1
Module - 2					
Q.3	a.	Examine data processing instructions requirement in the manipulation of data register? Explain in brief data processing instructions.	10	L2	CO2
	b.	Explain with examples the following 32-bit instruction of ARN processor i) CMN ii) MLA iii) MRS iv) BIC v) LDR.	10	L2	CO2
OR					
Q.4	a.	Explain the following with example: i) Stock operation ii) Swap instructions.	10	L2	CO2
	b.	Explain Branch instructions in ARM with suitable example. Demonstrate Branch instruct usage flow of execution with an example program.	10	L2	CO2
Module - 3					
Q.5	a.	How registers are allocated to optimize the program? Develop an assembly level program to find the sum of first to integer numbers.	10	L2	CO3
	b.	How compiler handles a "for loop" with variable number of iterations N and loop controlling with an example.	10	L2	CO3
OR					
Q.6	a.	Explain the following terms with an appropriate example: i) Pointer Aliasing ii) Portability issues.	10	L2	CO3
	b.	How function calling is efficiently used by ARM through APCS with an example program.	10	L2	CO3
Module - 4					
Q.7	a.	Explain ARM processors exception and modes with a neat diagram.	10	L2	CO4
	b.	Explain exception priorities and link register offset.	10	L2	CO4
OR					
Q.8	a.	List ARM firmware suite features. Explain firmware execution flow and Red Hat Boot.	10	L2	CO4
	b.	Explain IRQ and Fir exception, also to enable and disable IRQ and FIQ interrupts.	10	L2	CO4
Module - 5					
Q.9	a.	Explain basic architecture of cache memory.	10	L2	CO5
	b.	Explain process involved in main memory mapping to a cache memory.	10	L2	CO5
OR					
Q.10	a.	Explain with diagram set associative cache. How are efficiency is measured?	10	L2	CO5
	b.	Briefly explain cache line replacement policies with an example.	10	L2	CO5

MP - M...



CBCS SCHEME

USN

--	--	--	--	--	--	--	--	--	--	--	--

BCS403

Fourth Semester B.E./B.Tech. Degree Examination, June/July 2024 Database Management Systems

Time: 3 hrs.

Max. Marks: 100

*Note: 1. Answer any FIVE full questions, choosing ONE full question from each module.
2. M : Marks, L: Bloom's level, C: Course outcomes.*

Module - 1			M	L	C																																
Q.1	a.	Define database. Elaborate component modules of DBMS and their interactions.	10	L2	CO1																																
	b.	Describe the three-schema architecture. Why do we need mappings among schema levels?	06	L2	CO1																																
	c.	Explain the difference between logical and physical data independence.	04	L2	CO1																																
OR																																					
Q.2	a.	Draw an ER diagram for an COMPANY database with employee, department, project as strong entities and dependent as weak entity. Specify the constraints, relationships and ratios in the ER diagram.	10	L3	CO3																																
	b.	Define the following terms with example for each using ER notations: Entity, attribute, composite attribute, multivalued attribute, participation role.	10	L3	CO3																																
Module - 2																																					
Q.3	a.	Discuss the update operations and dealing with constraint violations with suitable examples.	08	L2	CO2																																
	b.	Illustrate the relational algebra operators with examples for select and project operation.	06	L2	CO2																																
	c.	Discuss the characteristics of relations that make them different from ordinary table and files.	06	L2	CO2																																
OR																																					
Q.4	a.	Perform (i) Student U instructor (ii) Student ∩ Instructor (iii) Student - Instructor (iv) Instructor - Student on the following tables: <div style="display: flex; justify-content: space-around; margin-top: 10px;"> <table border="1" style="border-collapse: collapse; text-align: center;"> <thead> <tr><th colspan="2">Student</th></tr> <tr><th>Fname</th><th>Lname</th></tr> </thead> <tbody> <tr><td>Susan</td><td>Yao</td></tr> <tr><td>Ramesh</td><td>Shah</td></tr> <tr><td>Johnny</td><td>Kohler</td></tr> <tr><td>Barbara</td><td>Jones</td></tr> <tr><td>Amy</td><td>Ford</td></tr> <tr><td>Jimmy</td><td>Wang</td></tr> <tr><td>Ernest</td><td>Gilbert</td></tr> </tbody> </table> <table border="1" style="border-collapse: collapse; text-align: center;"> <thead> <tr><th colspan="2">Instructor</th></tr> <tr><th>Fname</th><th>Lname</th></tr> </thead> <tbody> <tr><td>John</td><td>Smith</td></tr> <tr><td>Ricardo</td><td>Browne</td></tr> <tr><td>Susan</td><td>Mao</td></tr> <tr><td>Francis</td><td>Johnson</td></tr> <tr><td>Ramesh</td><td>Shah</td></tr> </tbody> </table> </div>	Student		Fname	Lname	Susan	Yao	Ramesh	Shah	Johnny	Kohler	Barbara	Jones	Amy	Ford	Jimmy	Wang	Ernest	Gilbert	Instructor		Fname	Lname	John	Smith	Ricardo	Browne	Susan	Mao	Francis	Johnson	Ramesh	Shah	04	L3	CO2
	Student																																				
Fname	Lname																																				
Susan	Yao																																				
Ramesh	Shah																																				
Johnny	Kohler																																				
Barbara	Jones																																				
Amy	Ford																																				
Jimmy	Wang																																				
Ernest	Gilbert																																				
Instructor																																					
Fname	Lname																																				
John	Smith																																				
Ricardo	Browne																																				
Susan	Mao																																				
Francis	Johnson																																				
Ramesh	Shah																																				
b.	Consider the following relational database schema and write the queries in relational algebra expressions: EMP(Eno, Ename, Salary, Address, Phone, DNo) DEPT(DNo, Dname, DLoc, MgrEno) DEPENDENT(Eno, Dep_Name, Drelation, Dage) (i) List all the employees who reside in 'Belagavi'. (ii) List all the employees who earn salary between 30000 and 40000 (iii) List all the employees who work for the 'Sales' department (iv) List all the employees who have at least one daughter (v) List the department names along with the names of the managers	10	L3	CO2																																	



	c.	Consider the two tables T_1 and T_2 shown below: <table style="display: inline-table; margin-right: 20px;"> <thead> <tr><th colspan="3">T_1</th></tr> <tr><th>P</th><th>Q</th><th>R</th></tr> </thead> <tbody> <tr><td>10</td><td>a</td><td>5</td></tr> <tr><td>15</td><td>b</td><td>8</td></tr> <tr><td>25</td><td>a</td><td>6</td></tr> </tbody> </table> <table style="display: inline-table;"> <thead> <tr><th colspan="3">T_2</th></tr> <tr><th>A</th><th>B</th><th>C</th></tr> </thead> <tbody> <tr><td>10</td><td>b</td><td>6</td></tr> <tr><td>25</td><td>c</td><td>3</td></tr> <tr><td>10</td><td>b</td><td>5</td></tr> </tbody> </table> <p>Show the results of the following operations:</p> <p>(i) $T_1 \bowtie_{T_1.P=T_2.A} T_2$</p> <p>(ii) $T_1 \bowtie_{T_1.Q=T_2.B} T_2$</p> <p>(iii) $T_1 \bowtie_{(T_1.P=T_2.A \text{ AND } T_1.R=T_2.C)} T_2$</p>	T_1			P	Q	R	10	a	5	15	b	8	25	a	6	T_2			A	B	C	10	b	6	25	c	3	10	b	5	06	L3	CO2
T_1																																			
P	Q	R																																	
10	a	5																																	
15	b	8																																	
25	a	6																																	
T_2																																			
A	B	C																																	
10	b	6																																	
25	c	3																																	
10	b	5																																	
Module - 3																																			
Q.5	a.	Discuss the informal design guidelines for relation schema design.	08	L2	CO4																														
	b.	Define 1NF, 2NF, and 3NF with examples.	06	L2	CO4																														
	c.	Write the syntax for INSERT, UPDATE and DELETE statements in SQL and explain with suitable examples.	06	L2	CO3																														
OR																																			
Q.6	a.	Discuss insertion, deletion and modification anomalies. Why are they considered bad? Illustrate with examples.	10	L2	CO3																														
	b.	Illustrate the following with suitable examples: (i) Datatypes in SQL (ii) Substring Pattern Matching in SQL.	10	L2	CO3																														
Module - 4																																			
Q.7	a.	Consider the following relations: Student(<u>Snum</u> , Sname, Branch, level, age) Class(<u>Cname</u> , meet_at, room, fid) Enrolled(<u>Snum</u> , <u>Cname</u>) Faculty(<u>fid</u> , fname, deptid) Write the following queries in SQL. No duplicates should be printed in any of the answers. (i) Find the names of all Juniors (level = JR) who are enrolled in a class taught by I. Teach. (ii) Find the names of all classes that either meet in room R128 or have five or more students enrolled. (iii) For all levels except JR, print the level and the average age of students for that level. (iv) For each faculty member that has taught classes only in room R128, print the faculty member's name and the total number of classes she or he has taught. (v) Find the names of students not enrolled in any class.	10	L3	CO3																														
	b.	What do understand by correlated Nested Queries in SQL? Explain with suitable example.	04	L2	CO3																														
	c.	Discuss the ACID properties of a database transaction.	06	L2	CO4																														
OR																																			
Q.8	a.	What are the views in SQL? Explain with examples.	04	L3	CO5																														
	b.	In SQL, write the usage of GROUP BY and HAVING clauses with suitable examples.	06	L2	CO3																														
	c.	Discuss the types of problems that may encounter with transactions that run concurrently.	10	L2	CO5																														

Module - 5					
Q.9	a.	What is the two phase locking protocol? How does it Guarantee serializability.	06	L2	CO5
	b.	Describe the wait-die and wound-wait protocols for deadlock prevention.	08	L2	CO5
	c.	List and explain the four major categories of NOSQL system.	06	L2	CO3
OR					
Q.10	a.	What is Multiple Granularity locking? How is it implemented using intension locks? Explain.	10	L2	CO5
	b.	Discuss the following MongoDB CRUD operations with their formats: (i) Insert (ii) Delete (iii) Read	06	L2	CO4
	c.	Briefly discuss about Neo4j data model.	04	L2	CO4



CBCS SCHEME

USN

--	--	--	--	--	--	--	--	--	--

BCS405A

Fourth Semester B.E./B.Tech. Degree Examination, June/July 2024 Discrete Mathematical Structures

Time: 3 hrs.

Max. Marks: 100

*Note: 1. Answer any FIVE full questions, choosing ONE full question from each module.
2. M : Marks , L: Bloom's level , C: Course outcomes.*

Module - 1			M	L	C
Q.1	a.	Define tautology. Prove that for any propositions p, q, r the compound proposition. $[(p \wedge q) \rightarrow r] \rightarrow [p \rightarrow (q \vee r)]$ is a tautology	06	L2	CO1
	b.	Test whether the following is a valid argument: If Ram studies then he will pass 12 th . If Ram passes 12 th then his father gifts him a bike. If Ram doesn't play video game then he will pass 12 th . Ram did not get a bike. <hr style="width: 50%; margin-left: 0;"/> \therefore Ram played video game.	07	L3	CO1
	c.	Give direct proofs of the statements: i) If k and l are odd then k + l is even. ii) If k and l are odd then kl is odd.	07	L2	CO1
OR					
Q.2	a.	Define (i) Proposition (ii) Open statement (iii) Quantifiers	06	L2	CO1
	b.	Using the laws of logic, prove the following logical equivalence: $[(\neg p \vee \neg q) \wedge (F_0 \vee p) \wedge p] \Leftrightarrow p \wedge \neg q$	07	L2	CO1
	c.	Write the following statement in symbolic form and find its negation: "If all triangles are right angled then no triangle is equilateral".	07	L2	CO1
Module - 2					
Q.3	a.	Prove by using mathematical induction. $1^2 + 2^2 + \dots + n^2 = \frac{n(n+1)(2n+1)}{6}$	06	L2	CO1
	b.	How many words can be made with or without meaning from the letters of the word "STATISTICS"? In how many of these a and c are adjacent? In how many vowels are together?	07	L3	CO2
	c.	Find the coefficient of $x^3 y^8$ in the expansion of $(2x - y)^{11}$.	07	L2	CO2
OR					
Q.4	a.	Obtain the recursive definition for the sequence in each of the following cases: (i) $a_n = 5n$ (ii) $a_n = 3n + 7$ (iii) $a_n = n^2$ (iv) $a_n = 2 - (-1)^n$	06	L2	CO2
	b.	A woman has 11 close relations and wishes to invite 5 of them to dinner. In how many ways can she invite them if (i) there is no restriction on her choice. (ii) 2 persons will not attend separately (iii) 2 persons will not attend together.	07	L3	CO2
	c.	In how many ways can we distribute 7 apples and 5 oranges among 3 children such that each child gets atleast one apple and one orange?	07	L3	CO2



Module – 3					
Q.5	a.	State pigeon hole principle. Using pigeon hole principle find the minimum number of persons chosen so that atleast 5 of them will have their birthday in the same month.	06	L3	CO3
	b.	Let $A = \{a, b, c, d\}$ and $B = \{1, 2, 3, 4, 5\}$. Find the number of 1-1 functions and onto functions from (i) A to B (ii) B to A	07	L2	CO3
	c.	Let $A = \{1, 2, 3, 4, 5\}$. Define a relation R on $A \times A$ by $(x_1, y_1) R (x_2, y_2)$ iff $x_1 + y_1 = x_2 + y_2$. (i) Verify that R is an equivalence relation (ii) Determine the equivalence class of $[(2, 4)]$	07	L2	CO3
OR					
Q.6	a.	Consider the functions f and g from R to R defined by $f(x) = 2x + 5$ and $g(x) = \frac{1}{2}(x - 5)$. Prove that g is inverse of f.	06	L2	CO3
	b.	Let $A = \{1, 2, 3, 4\}$ and R be the relation on A defined by xRy if and only if $x < y$. Write down R as a set of ordered pairs. Write the relation matrix and draw the digraph. List out the in degrees and out degrees of every vertex.	07	L2	CO3
	c.	Let $A = \{1, 2, 3, 6, 9, 12, 18\}$ and define R on A by xRy iff 'x divides y'. Prove that (A, R) is a POSET. Draw the Hasse diagram for (A, R).	07	L2	CO3
Module – 4					
Q.7	a.	How many integers between 1 and 300 (inclusive) are divisible by (i) atleast one of 5, 6 or 8. (ii) None of 5, 6 and 8.	06	L3	CO4
	b.	At a restaurant 10 men handover their umbrellas to the receptionist, In how many ways can their umbrellas be returned so that (i) no man receives his own umbrella. (ii) atleast one gets his own umbrella. (iii) atleast two gets their own umbrellas.	07	L3	CO4
	c.	The number of virus affected files in a system is 1000 (to start with) and this increases by 250% every 2 hours. Use a recurrence relation to determine the number of virus affected files in the system after 12 hours.	07	L3	CO4
OR					
Q.8	a.	In how many ways one can arrange the letters of the word "CORRESPONDENTS" so that there are (i) no pair (ii) atleast 2 pairs of consecutive identical letters.	06	L3	CO4
	b.	4 persons P_1, P_2, P_3, P_4 who arrive late for a dinner party find that only one chair at each of five tables T_1, T_2, T_3, T_4 and T_5 is vacant. P_1 will not sit at T_1 or T_2 . P_2 will not sit at T_2 . P_3 will not sit at T_3 or T_4 . P_4 will not sit at T_4 or T_5 . Find the number of ways they can occupy the vacant chairs.	07	L3	CO4
	c.	Solve the recurrence relation $a_n - 6a_{n-1} + 9a_{n-2} = 0$ for $n \geq 2$ with $a_0 = 5, a_1 = 12$.	07	L2	CO4
Module – 5					
Q.9	a.	If $*$ is an operation on Z defined by $xy = x + y + 1$, prove that $(Z, *)$ is an abelian group.	06	L2	CO5
	b.	Explain Klein-4 group with example.	07	L2	CO5
	c.	State and prove Lagrange's theorem.	07	L2	CO5
OR					
Q.10	a.	Prove that intersection of two subgroups of a group G is also a subgroup of G.	06	L2	CO5
	b.	Prove that $(Z_4, +)$ is a cyclic group. Find all its generators.	07	L2	CO5
	c.	Let $G = S_4$ for $\alpha = \begin{pmatrix} 1 & 2 & 3 & 4 \\ 2 & 3 & 4 & 1 \end{pmatrix}$ Find the subgroup $H = \langle \alpha \rangle$ determine the left cosets of H in G.	07	L3	CO5

CBCS SCHEME

USN

--	--	--	--	--	--	--	--	--	--	--

BCS405B

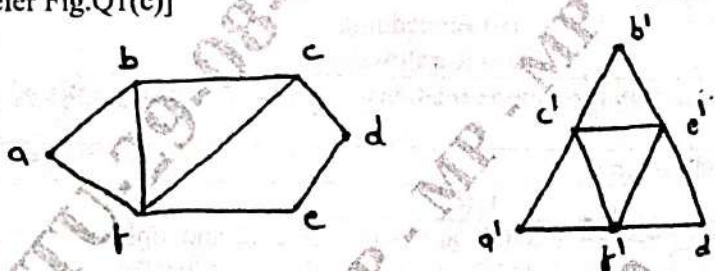
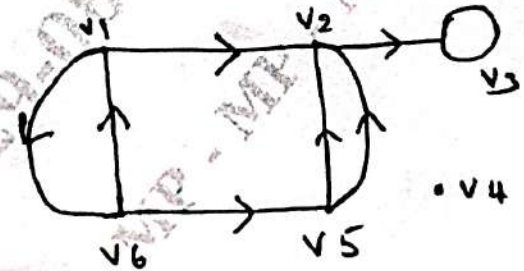
Fourth Semester B.E./B.Tech. Degree Examination, June/July 2024

Graph Theory

Time: 3 hrs.

Max. Marks: 100

*Note: 1. Answer any FIVE full questions, choosing ONE full question from each module.
2. M : Marks, L: Bloom's level, C: Course outcomes.*

Module - 1			M	L	C	
Q.1	a.	Define graph. List and explain the types of graph.	08	L1	CO1	
	b.	Prove that the number of vertices of odd degree in a graph is always even.	06	L2	CO1	
	c.	Define isomorphic graph and verify the following graphs are isomorphic or not. [Refer Fig.Q1(c)]	06	L2	CO1	
 <p style="text-align: center;">Fig.Q1(c)</p>						
OR						
Q.2	a.	Explain the following graphs: (i) Bi-partite graph (ii) Sub graphs (iii) WALK (iv) Path	10	L1	CO1	
	b.	Prove that a simple graph with n vertices and K components can have at most $(n - K)(n - K + 1)/2$ edges.	10	L2	CO1	
Module - 2						
Q.3	a.	State and prove necessary condition of a graph to be a Euler graph.	10	L2	CO2	
	b.	List and explain the different operations on graph.	10	L2	CO2	
OR						
Q.4	a.	Define digraph. Find the indegree and outdegree of the following graph [Fig.Q4(a)].	08	L2	CO2	
	 <p style="text-align: center;">Fig.Q4(a)</p>					
	b.	Illustrate the travelling salesman problem using a graph.	06	L2	CO2	
c.	List and explain different digraphs and binary relations.	06	L2	CO2		
Module - 3						
Q.5	a.	Define a tree. Prove that in a graph G there is one and only one path between every pair of vertices, G is a tree.	06	L1	CO3	



	b.	Explain the following: (i) Cut-edge (ii) Cut-vertex (iii) Cut-set	06	L1	CO3
	c.	Find and construct the following: (i) Minimum possible height of 11 vertex binary tree (ii) A binary tree for a given 11 such that the farthest vertex is as far as possible from the root that must have exactly 2 vertices at each level, except at zero level.	08	L2	CO3
OR					
Q.6	a.	Prove that every circuit has an even number of edges in common with any cut set.	10	L2	CO3
	b.	Prove that ring 50 m of any two cut-sets in a graph is either a third cut-set or an edge disjoint union of cut-sets.	10	L2	CO3
Module – 4					
Q.7	a.	Define the following: (i) Planar graph (ii) Embedding (iii) Non-planar (iv) Kuratowski's 2 graph	08	L2	CO4
	b.	Explain the simple observation mode relationship between planar graph and dual G^* .	08	L2	CO4
	c.	Write a note on path matrix.	04	L1	CO4
OR					
Q.8	a.	Prove that two graphs G_1 and G_2 are isomorphic if and only if their incidence matrices $A(G_1)$ and $A(G_2)$ differ only by permutations of rows and columns.	10	L2	CO5
	b.	Describe the observations that can be made about circuit matrix $B(G)$ 01 and graph G .	10	L2	CO5
Module – 5					
Q.9	a.	Prove that every tree with two or more vertices is 2 - chromatic.	10	L2	CO5
	b.	Explain the following for chromatic polynomial: (i) Finding a maximal independent set (ii) Finding all maximal independent set.	10	L2	CO5
OR					
Q.10	a.	Prove that the vertices of every planar graph can be properly colored with five colors.	10	L2	CO5
	b.	Explain the Greedy colouring algorithm.	10	L2	CO5

CBCS SCHEME

USN

--	--	--	--	--	--	--	--	--	--	--	--

BBOC407

Fourth Semester B.E./B.Tech. Degree Examination, June/July 2024 Biology for Engineers (CSE)

Time: 3 hrs.

Max. Marks: 100

*Note: 1. Answer any FIVE full questions, choosing ONE full question from each module.
2. M : Marks , L: Bloom's level , C: Course outcomes.*

Module - 1			M	L	C
Q.1	a.	Discuss the various components of Eukaryotic cells.	10	L3	CO1
	b.	Identify the applications of stem cells.	5	L2	CO1
	c.	Explain the functions of vitamins.	5	L2	CO1
OR					
Q.2	a.	Compare Prokaryotic and Eukaryotic cells.	10	L3	CO1
	b.	Explain the properties of Carbohydrates.	5	L2	CO1
	c.	Explain the functions of Lipids.	5	L2	CO1
Module - 2					
Q.3	a.	Highlighting the properties of cellulose, justify cellulose as an effective water filter.	10	L3	CO1
	b.	Explain the working and development of DNA vaccines by taking suitable example.	10	L2	CO1
OR					
Q.4	a.	What are Bioplastics? Justify the use of PHA as Bioplastic mentioning its properties and applications.	10	L3	CO1
	b.	Discuss the following : (i) Meat analogs of protein. (ii) Lipids as cleaning agents.	10	L2	CO1
Module - 3					
Q.5	a.	What is Electro Encephalogram (EEG)? Discuss the types of Brain activity detected with EEG. Write any three applications.	10	L3	CO2
	b.	What are Pace Makers? Explain basic design and construction of Pace Makers.	10	L2	CO2
OR					
Q.6	a.	Justify Lungs as purification system.	10	L3	CO2
	b.	Explain architecture of Rod and Core cells with suitable diagram.	10	L2	CO2
Module - 4					
Q.7	a.	What is ultrasonography? Explain the uses and working principle.	10	L2	CO3
	b.	What is lotus leaf effect? Explain the mechanism and applications of super Hydrophobic effect.	10	L2	CO3
OR					
Q.8	a.	The structure and design of Kingfisher beak lead to the design of Bullet trains. Explain.	10	L2	CO3
	b.	Explain the working and applications of Bionic Leaf Technology.	10	L2	CO3



Module – 5					
Q.9	a.	Explain the use of Electrical tongue in food science.	10	L2	CO4
	b.	Explain the advantages and limitations of Artificial Intelligence for disease diagnosis.	10	L2	CO4
OR					
Q.10	a.	Explain Bioengineering solutions for muscular dystrophy and Osteroporosis.	10	L2	CO4
	b.	Explain most commonly used Bioprinting Techniques.	10	L2	CO4

USN

--	--	--	--	--	--	--	--	--	--

Question Paper Version : D

Fourth Semester B.E./B.Tech. Degree Examination, June/July 2024

Universal Human Values Course

Time: 1 hr.]


[Max. Marks: 50

INSTRUCTIONS TO THE CANDIDATES

- Answer all the fifty questions; each question carries one mark.
 - Use only **Black ball point pen** for writing / darkening the circles.
 - For each question, after selecting your answer, darken the appropriate circle corresponding to the same question number on the OMR sheet.
 - Darkening two circles for the same question makes the answer invalid.
 - Damaging/overwriting, using whitepens on the OMR sheets are strictly prohibited.
- Harmony should be maintained in
 - Between body and life
 - Between self and society
 - Between life and environment
 - All of the above
 - The foundational value in relationship is
 - Respect
 - Love
 - Trust
 - Glory
 - Ensuring right understanding and feeling in the others is called
 - Care
 - Attraction
 - Gratitude
 - Guidance
 - Harmony in the family is the building block for harmony in the
 - Society
 - Individual
 - Friend
 - Relative
 - The total numbers of feelings in human relationship
 - 5
 - 10
 - 9
 - 8
 - Comprehensive human goal is right understanding prosperity, trust (fearlessness) and
 - Co-existence
 - Harmony
 - Ablay
 - None
 - There is justice in relationship when there is
 - Mutual fulfillment
 - Self regulation
 - Freedom
 - None
 - The extension of family is
 - Self
 - Body
 - Society
 - Nature

Ver-D - 1 of 4

Ver-D - 2 of 4



- 38 Imaging is _____ with time
 a) Continuous b) Discontinuous c) Random d) Different
- 39 Where there is harmony among the parts of the body it is known as
 a) Swasthya b) Sanyam c) Prosperity d) None
- 40 Knowing means having the
 a) Assumption b) Right understanding
 c) Right feeling d) None
- 41 The purpose of value - Education is to
 a) Foster universal core values b) Make syllabus easy
 c) Develop values in individual d) Both A and C
- 42 Self exploration uses two mechanisms i) Natural Acceptance ii) _____
 a) Experimental validation b) Reason
 c) Logical Thinking d) Theoretical concept
- 43 Once we know what is valuable to us, these values becomes the basis, the anchor for
 a) Knowledge b) Actions c) Society d) None of these
- 44 To fulfill Human Aspirations, what are necessary
 a) Both values and skills b) Values
 c) Skills d) None of these
- 45 Which the following are, the encompassing principles underlying the successful implementation of value education?
 A) Conviction B) Connection C) Critical thinking D) Commitment
 choose the most appropriate answer from the options given below:
 a) A, C and D only b) B, C and D only c) A, B and D only d) None of these
- 46 Value and skills should go hand in hand
 a) True b) False
 c) Cannot tell d) None of these
- 47 Are the content of self - exploration
 a) Program b) Desire c) Both a and b d) None
- 48 Human life is lived at four levels individual, Family, Society and _____
 a) Nature b) Nurture c) World d) Universe
- 49 Any course content on value education needs to be
 a) Universal b) Rational c) Natural d) All of these
- 50 Value education enables us to
 a) To understand our needs
 b) Visualize our goals correctly
 c) Indicate the direction for their fulfillment
 d) All of the above

 Ver-D - 4 of 4

- 24 Which of the following statement is not true?
 a) There is inter connectedness in nature
 b) There is recyclability and self regulation in nature
 c) There is struggle for survival in nature
 d) There is mutual fulfillment in nature
- 25 According to quantity, which of the following is true for the orders in nature
 a) Bio order >> Physical order >> Animal order >> Human order
 b) Animal order >> Bio order >> Physical order >> Human order
 c) Physical order >> Bio order >> Animal order >> Human order
 d) None of the above
- 26 What are the fundamental components of ecosystems?
 a) Plants and Animals b) Air and water
 c) Rocks and minerals d) All of these
- 27 The third order of nature is
 a) Maternal order b) Animal order c) Plant order d) Human order
- 28 The activities in human body are
 a) Composition b) Decomposition c) Respiration d) All of these
- 29 The systems in nature are
 a) Cyclic b) Mutually fulfilling
 c) Both a and b d) None of these
- 30 The natural characteristics/Svabhava of a human being are
 a) Perseverance b) Bravery c) Generosity d) All of these
- 31 Harmony should be maintained in
 a) Between body and life
 b) Between self and society
 c) Between life and environment
 d) All of the above
- 32 I being the
 a) does, sees and Enjoyer b) doer
 c) seer d) enjoyer
- 33 Which of the following is NOT response of the self?
 a) Knowing b) Assuming c) Recognizing d) Preconditioning
- 34 Activities of self (I) are
 a) Happiness b) Prosperity
 c) Desire, thought and expectation d) None
- 35 The requirement of body is right utilization and nurturing
 a) Desire b) Protection c) Thought d) Expectation
- 36 The _____ is an instrument of _____
 a) I, Body b) Body, I c) Both a and b d) None
- 37 The activity of desire, thought and expecting together is called as
 a) Body b) Health c) Imagination d) Future

Ver-D - 3 of 4